



MENTAL MATHS

STD IV

Read the questions carefully
and answer by circling the
correct options.



1. How can the number 851935 be read in Indian system?


- a) Eighty-one thousand nine hundred thirty-five
- b) Eight hundred fifty-one thousand nine hundred thirty-five
- c) Eight lakh fifty-one thousand nine hundred thirty five
- d) Eight hundred nineteen thousand thirty-five

2. What is the difference between the place value of 7 in the given numbers ?

6479

27314

- a) 6390
- b) 6000
- c) 6930
- d) 6039



3. Identify the six digit number having 0 in the tens place .


a) 990999

b) 909999

c) 999909

d) 909099





4. Find the number that is ten thousand more than 57,63,982 ?

a) 57,63,882

b) 57,73,982

c) 67,63,882

d) 67,73,982

5. 26,39,840 is same as

a) $20,00,000 + 3,000 + 800 + 40$

b) $20,00,000 + 6,00,000 + 30,000 + 9,000 + 800 + 40$

c) $20,000 + 6,000 + 900 + 80 + 4$

d) $20,00,000 + 6,00,000 + 3,000 + 800 + 4$


6. Mohit was solving a Maths question. He calculated that there were sixty-nine lakh eighty thousand two hundred seconds in a day. Help him to write this number in numeral form.

a) 69,80,002


b) 69,80,200


c) 69,02,800

d) 69,08,200




7. What place is just to the left of Ten Thousands place in the place value chart ?

- a) Thousand
 - b) Lakh
 - c) Ten lakh
 - d) Ten thousand
- 



8. The predecessor is obtained by _____ 1 from the given number.

- 
- a) Adding
 - b) Subtracting
 - c) Multiplying
 - d) Dividing